





1 less and 1 more

Write the numbers that are 1 less \diamond and 1 more \square .

0	1	2	3	4	5	6	7	8	9	10
---	---	---	---	---	---	---	---	---	---	----








②



④

⑥



③





⑨



⑦



⑤



⑧

